




# MONDAY

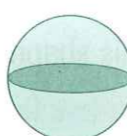
- Draw hands to show 10.05.
- What is the cost of 1 L of olive oil at \$2.00 per 500 mL?  
\$
- Round 149 (nearest 100).
- What is the perimeter of an equilateral triangle with 7-cm sides?
- Name a hexahedron.
- $8 + 8 + 8 + 8 =$
- $3^2 =$
- Write the number after 399.
- A 10-sided polygon is a
- $7 - 0.2 =$
- Draw a reflection. 
- $35 + 45 =$
- $\$10.00 - \$3.30 =$
- Write the third month of the year.
- $5 \times 8 =$
- $0.3 = \frac{6}{10}$  ☐ true ☐ false
- What is the sum of 7 and 9?
- What is the difference between 120 and 80.
- $900 - 320 =$
- If a newspaper weighed 200 g, what would the total weight of 5 newspapers be?






# TUESDAY

- Write the number after 199.
- Name this shape. 
- $12^2 =$
- What is the sum of 5 and 8?
- Using 3, 7, 1 and 4 make the largest number possible.
- A heptagon has sides.
- If the time is 2.30, what will the time be in 40 minutes?
- $\$500 - \$140 =$
- What is the fourth last letter of the alphabet?
- $8 \times 3 =$
- Write ten thousand, five hundred and nineteen as a numeral.
- $19 - 10 =$
- XVII (Roman numeral) =
- Complete this sequence.  
3, 2, 6, , 4, 9, 3, 2, 6, 0, 4, 9, 3
- How many angles are in a triangle?
- Can this shape tessellate? 
- $\$2.20 + \$1.80 =$
- What is the cost of 1 t of apricots at \$1000.00 per 500 kg.  
\$
- Name a month in summer.
- Double 38.



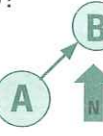

# WEDNESDAY

- Draw hands to show 9.10.
- $7 + 7 =$
- Name this shape. 
- $50 + 2 + 100 =$
- What should be the values of A and B?  
A =  
B = 

9	8	7
4	A	6
13	B	13
- $80 - 8 =$
- 1A, 3C, 5E,
- $9^2 =$
- $8.5 + 2.5 =$
- $40 \div 10 =$
- ☐ regular polygon  
☐ irregular polygon 
- What is the cost of painting a white line on 4 km of road at \$3.00 per 500 m?  
\$
- $2500 - 1500 =$
- Is this shape symmetrical? 
- How many grams make up 4.4 kg?  
☐ 4400 g ☐ 44 g ☐ 440 g
- $70 + 40 =$
- Name the tenth month of the year.
- Draw the reflection. 
- $256 \times 0 =$
- $3 \times 6 =$



# THURSDAY

- Write the number after 399.
- $6 - 0.2 =$
- What is the difference between 100 and 70?
- Name this shape. 
- $\$100.00 - \$47.00 =$
- What is the 8th letter of the alphabet?
- How many centimetres make up 8.5 m?  
☐ 85 cm ☐ 850 cm ☐ 0.85 cm
- $100 - 71 =$
- $4 \times 7 =$
- $122 - 22 =$
- Draw a  $\frac{3}{4}$  turn left. 
- What is the direction from A to B?  
☐ North-east ☐ South-east  
☐ North-west ☐ South-west 
- $\frac{1}{4} + \frac{2}{4} =$
- $8 + 7000 + 60 + 50 =$
-   
Circle the two congruent shapes.
- $3500 - 1000 =$
- $400 + 400 + 700 =$
- Write the date a week before 16.7.08?
- $12 + 19 =$
- How many days are in a year?